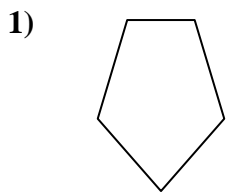


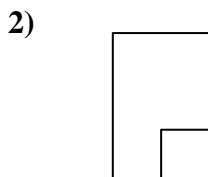


Determine which letter BEST represents the shapes that were used to create the figure shown.

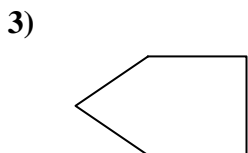
Answers



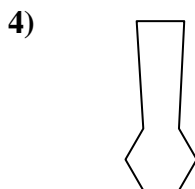
- A. square & hexagon
- B. octagon & quadrilateral
- C. quadrilateral & triangle
- D. octagon & triangle



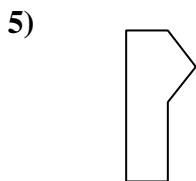
- A. octagon & heptagon
- B. octagon & triangle
- C. rectangle & square
- D. rectangle & octagon



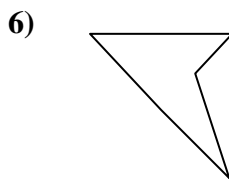
- A. rectangle & pentagon
- B. quadrilateral & triangle
- C. pentagon & hexagon
- D. octagon & rectangle



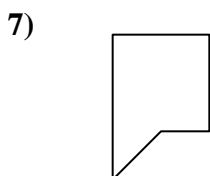
- A. triangle & heptagon
- B. quadrilateral & hexagon
- C. rectangle & quadrilateral
- D. octagon & triangle



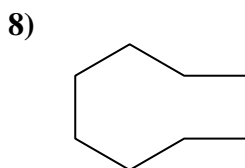
- A. pentagon & square
- B. pentagon & rectangle
- C. octagon & quadrilateral
- D. rectangle & triangle



- A. quadrilateral & rectangle
- B. triangle & octagon
- C. triangle & triangle
- D. hexagon & heptagon



- A. rectangle & triangle
- B. pentagon & octagon
- C. rectangle & heptagon
- D. pentagon & hexagon



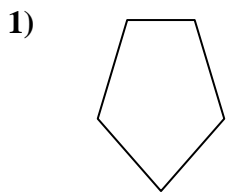
- A. square & pentagon
- B. quadrilateral & rectangle
- C. pentagon & rectangle
- D. rectangle & hexagon

- 1. _____
- 2. _____
- 3. _____
- 4. _____
- 5. _____
- 6. _____
- 7. _____
- 8. _____

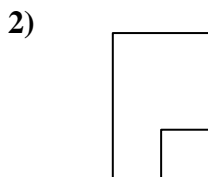


Determine which letter BEST represents the shapes that were used to create the figure shown.

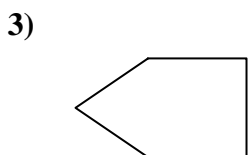
Answers



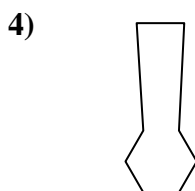
- A. square & hexagon
- B. octagon & quadrilateral
- C. quadrilateral & triangle
- D. octagon & triangle



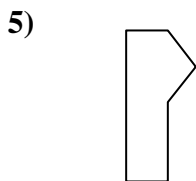
- A. octagon & heptagon
- B. octagon & triangle
- C. rectangle & square
- D. rectangle & octagon



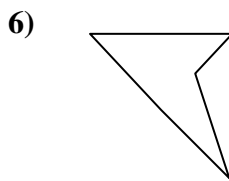
- A. rectangle & pentagon
- B. quadrilateral & triangle
- C. pentagon & hexagon
- D. octagon & rectangle



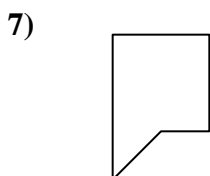
- A. triangle & heptagon
- B. quadrilateral & hexagon
- C. rectangle & quadrilateral
- D. octagon & triangle



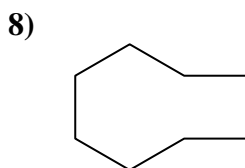
- A. pentagon & square
- B. pentagon & rectangle
- C. octagon & quadrilateral
- D. rectangle & triangle



- A. quadrilateral & rectangle
- B. triangle & octagon
- C. triangle & triangle
- D. hexagon & heptagon



- A. rectangle & triangle
- B. pentagon & octagon
- C. rectangle & heptagon
- D. pentagon & hexagon



- A. square & pentagon
- B. quadrilateral & rectangle
- C. pentagon & rectangle
- D. rectangle & hexagon

- 1. **C**
- 2. **C**
- 3. **B**
- 4. **B**
- 5. **D**
- 6. **C**
- 7. **A**
- 8. **D**